




Name _____

Date _____




I have 10 ones and 2 ones.

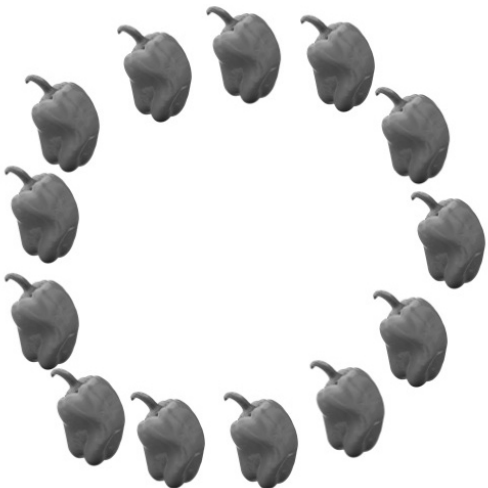
Count and circle 10 things. Tell how many there are in two parts, 10 ones and some more ones.




I have 10 ones and ____ ones.



I have ____ ones and ____ ones.



I have ____ ones and ____ ones.



I have ____ ones and ____ ones.